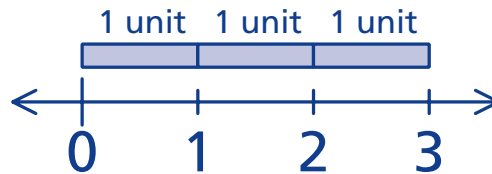


NAME: \_\_\_\_\_

## Math Words

**point** A point is a dot on a number line that shows where a number is.

**unit** A unit has a length of one.



## Starter Problem

A bug started at 0 and took a big hop. It landed on 7. Draw a point on the number line to show where it landed.



NAME: \_\_\_\_\_

## Starter Problem

A bug started at 0 and took a big hop.  
It landed on 7. Draw a point on the  
number line to show where it landed.

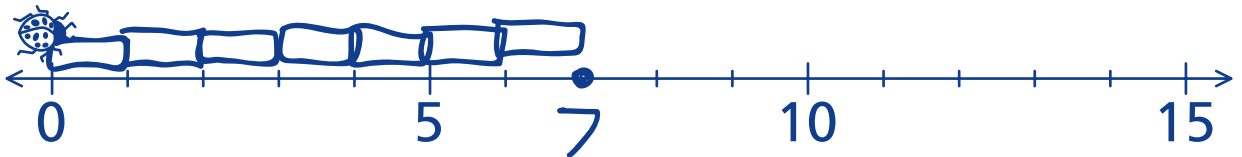


## Student Thinking



Jade

I made a point to show 7.  
I can check by drawing 7 units.



Royce

I counted 7 marks.  
I made a dot for the number 7.



NAME: \_\_\_\_\_

# Things to Remember



Handwriting practice lines consisting of solid top and bottom lines with a dashed middle line. A solid grey rectangular box is located between the first and second sets of lines.



Handwriting practice lines consisting of solid top and bottom lines with a dashed middle line.

NAME: \_\_\_\_\_

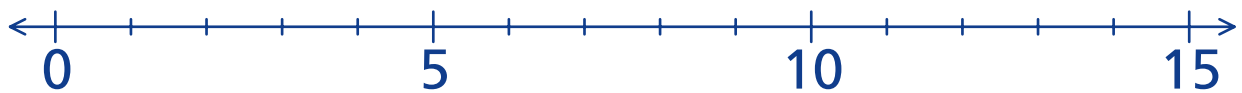
## Our Turn

Draw a point on the number line to show the number. Write the number.

1. 9



2. 14



3. 5

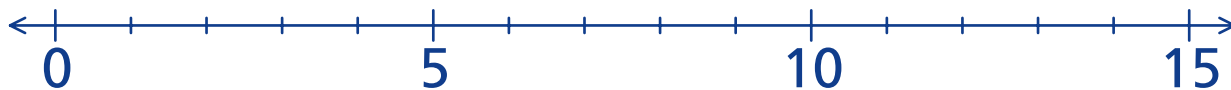


NAME: \_\_\_\_\_

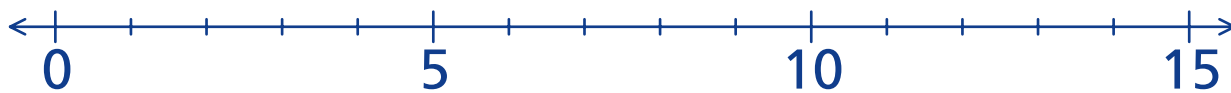
## My Turn

Draw a point on the number line to show the number. Write the number.

1. 12



2. 8



3. 13

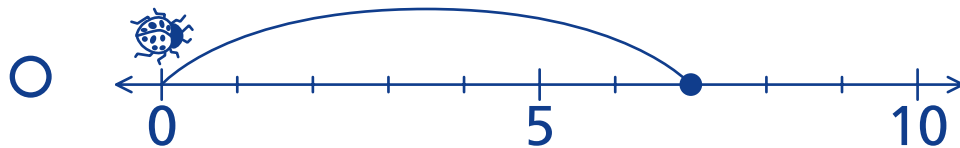
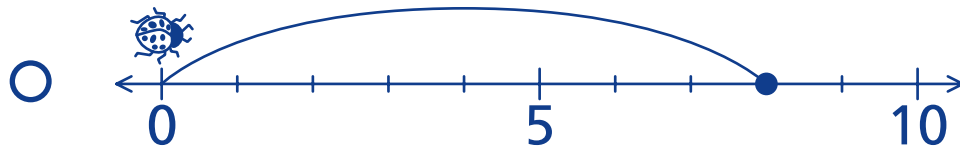
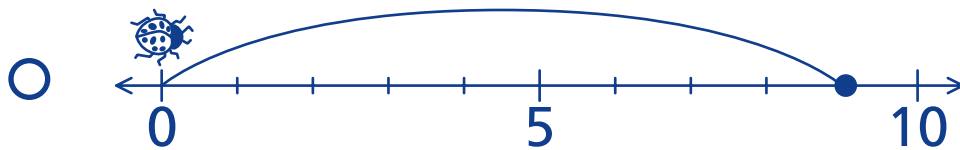


NAME: \_\_\_\_\_

## Mini Lesson

Fill in the circle next to the answer you choose.

1. A bug started at 0 and hopped 8.  
Which number line shows where it landed?



2. A bug started at 0 and hopped 4.  
Which number line shows where it landed?

